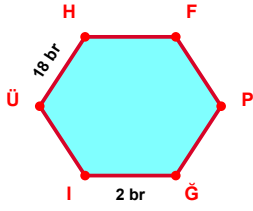
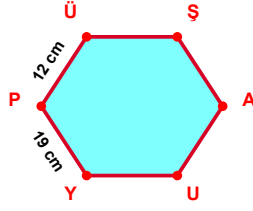


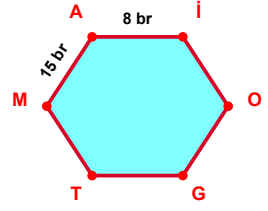
SORU: Aşağıdaki şekillerde verilen, kenar uzunlukları farklarını bulunuz.



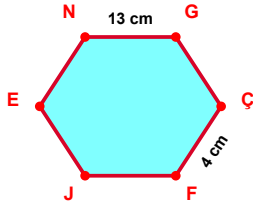
$$|\dot{U}H| - |\dot{G}I| = \dots\dots$$



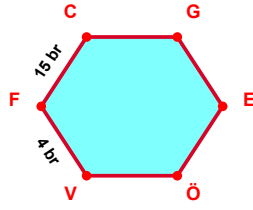
$$|YP| - |\dot{P}\dot{U}| = \dots\dots$$



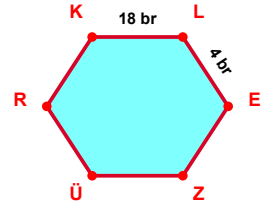
$$|MA| - |A\dot{I}| = \dots\dots$$



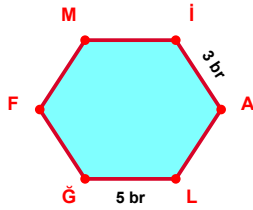
$$|NG| - |\dot{C}F| = \dots\dots$$



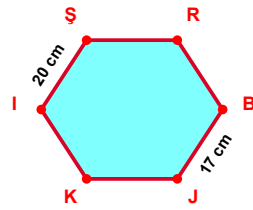
$$|FC| - |VF| = \dots\dots$$



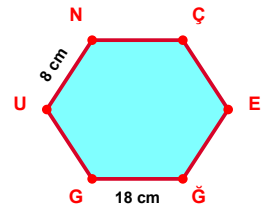
$$|KL| - |LE| = \dots\dots$$



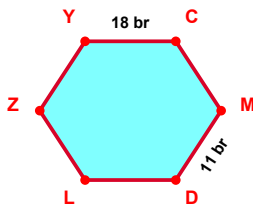
$$|L\dot{G}| - |A| = \dots\dots$$



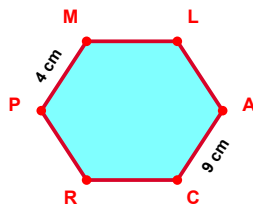
$$|\dot{S}| - |BJ| = \dots\dots$$



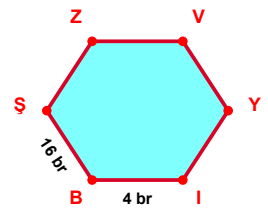
$$|\dot{G}G| - |UN| = \dots\dots$$



$$|YC| - |MD| = \dots\dots$$

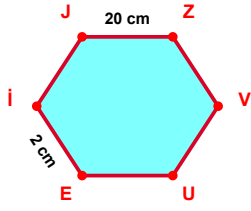


$$|AC| - |PM| = \dots\dots$$

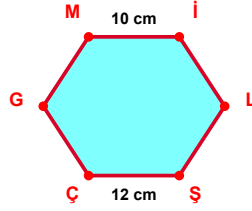


$$|B\dot{S}| - |IB| = \dots\dots$$

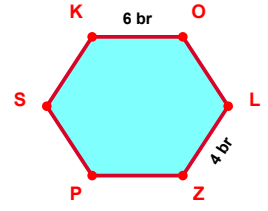
SORU: Aşağıdaki şekillerde verilen, kenar uzunlukları farklarını bulunuz.



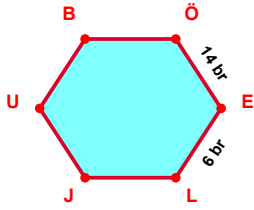
$$|JZ| - |İE| = \dots\dots\dots$$



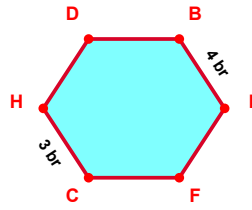
$$|ŞÇ| - |Mİ| = \dots\dots\dots$$



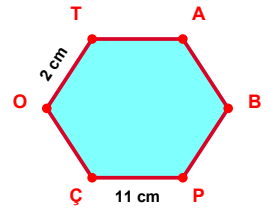
$$|KO| - |LZ| = \dots\dots\dots$$



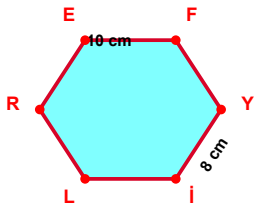
$$|ÖE| - |EL| = \dots\dots\dots$$



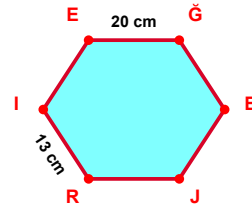
$$|BI| - |CH| = \dots\dots\dots$$



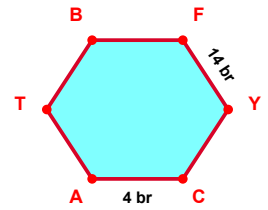
$$|PÇ| - |OT| = \dots\dots\dots$$



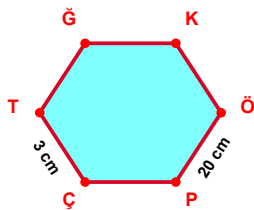
$$|EF| - |YL| = \dots\dots\dots$$



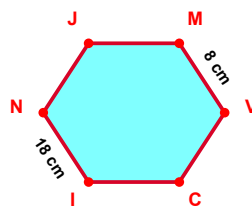
$$|EĞ| - |İR| = \dots\dots\dots$$



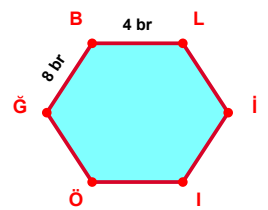
$$|FY| - |CA| = \dots\dots\dots$$



$$|ÖP| - |ÇT| = \dots\dots\dots$$



$$|İN| - |MV| = \dots\dots\dots$$



$$|ĞB| - |BL| = \dots\dots\dots$$

## SÜREÇ ODAKLI DEĞERLENDİRME ÖLÇEĞİ

Doğru Sayısı: ..... / 24

Öğretmen ilgili kutucuğu işaretler.

Geliştirilmeli (0-8)

İyi (9-14)

Çok İyi (15-20)

Mükemmel (21-24)

☐
☐
☐
☐

Hazırlayan: .....

Bu bölüme sınıfınızın ilgili kazanıma yönelik genel durumuna ilişkin gözlem ve izlenimlerinizi, öğrencilerinizin bu kazanımla ilgili öğrenme eksikliklerini ve bu eksikliklerin giderilmesi amacıyla yaptığınız/yapmayı planladığınız faaliyetleri not edebilirsiniz.

No	Adı - Soyadı	Toplam Puan	Değerlendirme
1			
2			
3			
4			
5			
6			
7			
8			
9			
10			
11			
12			
13			
14			
15			
16			
17			
18			
19			
20			
21			
22			
23			
24			
25			
26			
27			
28			
29			
30			
31			
32			
33			
34			
35			

Hazırlayan: ..... ..